





























































301	302	303	304	305	306	307	308	309	310
311	312	313	314	315	316	317	318	319	320
321	322	323	324	325	326	327	328	329	330
331	332	333	334	335	336	337	338	339	340
341	342	343	344	345	346	347	348	349	350
351	352	353	354	355	356	357	358	359	360
361	362	363	364	365	366	367	368	369	370
371	372	373	374	375	376	377	378	379	380
381	382	383	384	385	386	387	388	389	390
391	392	393	394	395	396	397	398	399	400

Fill in the missing numbers.

 97	 98				
 102					 107
			 126	 127	 128
				 100	 101
		 174	 175		
		 93			 96
 105			 108		 110
				 152	 153
 88				 92	
 178	 179			 182	

Date: \_\_\_\_\_

a) 3 more than 4 = \_\_\_\_\_

b) two less than 183 = \_\_\_\_\_

$11 - 5 =$	$10 - 5 =$	$\_\_ + 1 = 11$
$\_\_ + 2 = 10$	$10 - 3 =$	$2 + 9 =$
$11 + 0 =$	$\_\_ + 4 = 9$	$9 - \_\_ = 8$
$6 + 4 =$	$\_\_ + 4 = 10$	$3 + 8 =$
$10 - 8 =$	$5 + 6 =$	$11 + \_\_ = 11$
$7 + 2 =$	$\_\_ + 2 = 9$	$9 - 8 =$
$\_\_ + 8 = 11$	$11 - 4 =$	$4 + 5 =$
$9 - 4 =$	$10 - \_\_ = 0$	$\_\_ + 9 = 11$

1. Eight more than 3 is \_\_\_\_\_

2. There are \_\_\_\_\_ days in May.

3. There are 11 fish in a bowl. If 4 are yellow, how many are other colours? \_\_\_\_\_



4. I bought 30 seedlings and planted them in two rows. How many in each row? \_\_\_\_\_