



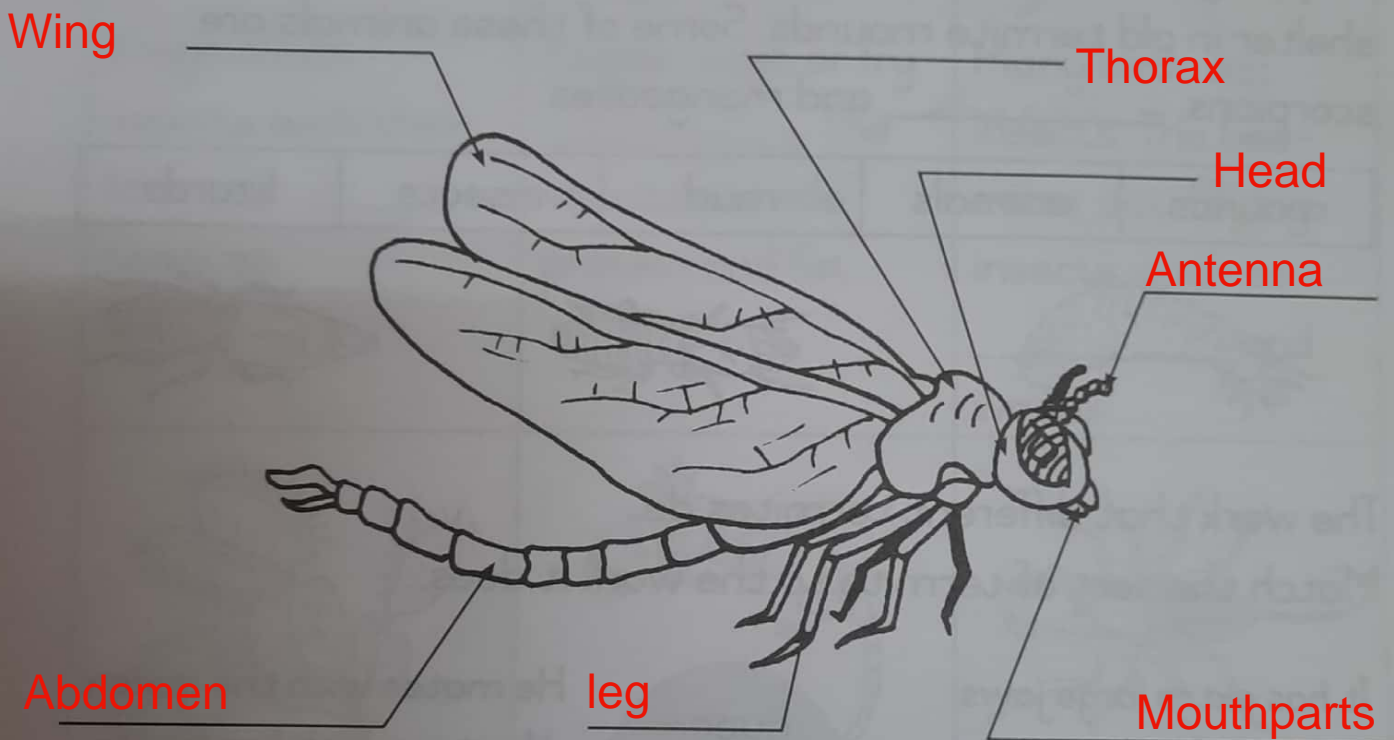
# Unit 7 Insects

## Labeling an insect

Label the body parts of the dragonfly.

head	thorax	abdomen	eye
wing	leg	mouthparts	antenna

Body parts of a dragonfly



A dragonfly is an insect. Write how many of these body parts it has:

8 body parts

6 jointed legs

2 antennae

4 wings

2 simple eyes

2 compound eyes

Did you know?

The dragonfly is the world's fastest flying insect.



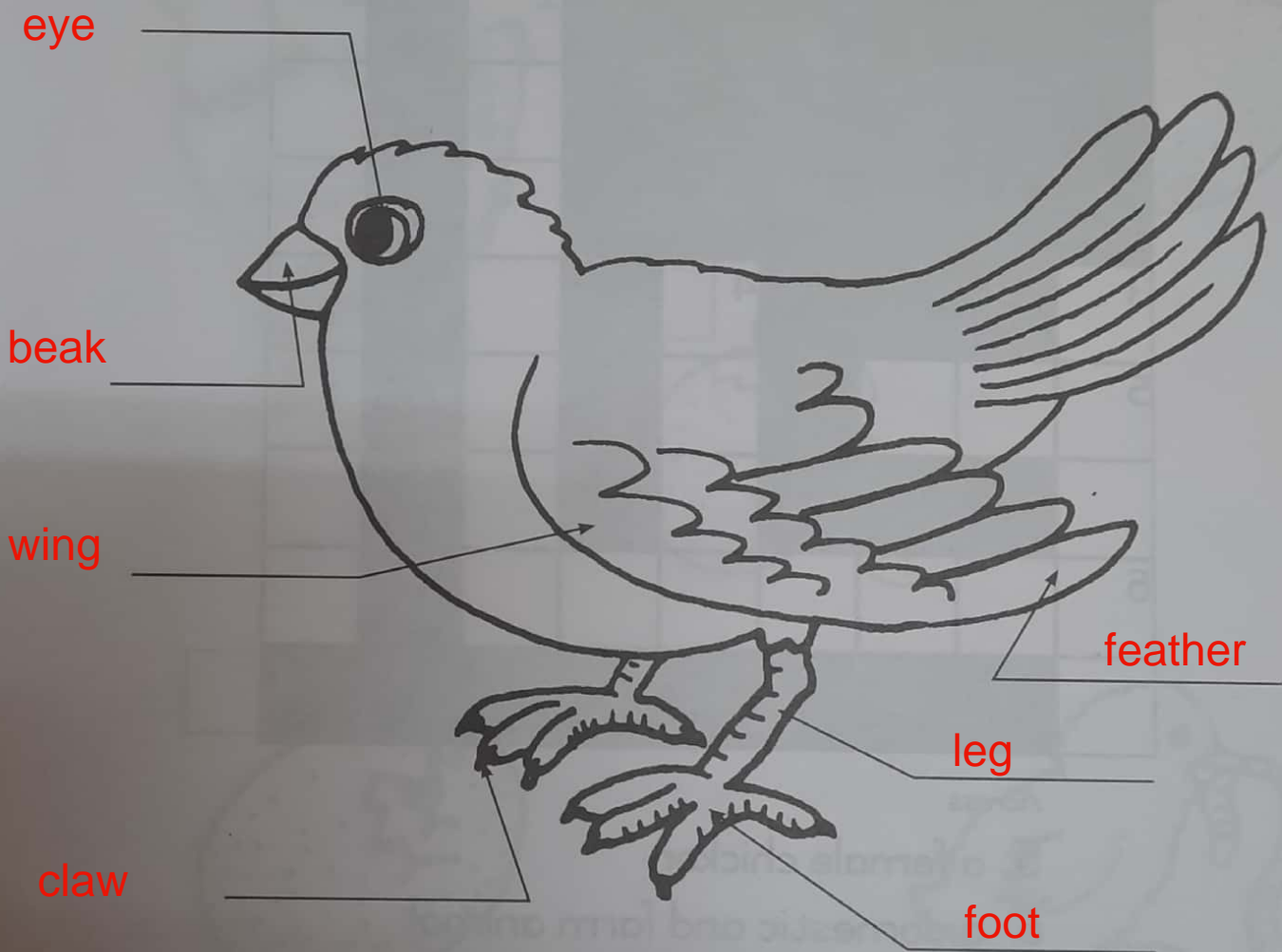
## Unit 8 Life cycles

### What is a bird?

Write the words to label the dove.

leg	eye	wing	foot	claw	beak	feather
-----	-----	------	------	------	------	---------

Body parts of a bird



Did you know?

There are many kinds of doves. This dove is called a Laughing Dove. Some people say its soft call sounds like a laugh:

koo kuKukuru-koo.

# ★ Unit 8 Life cycles

## The life cycle of a chicken

All about Chickens.

Use the word bank to complete the crossword:

yolk	rooster	chick	albumen	hen	chicken
------	---------	-------	---------	-----	---------

						1 a		2 r
						l		o
						b		o
3 c				4 y		u		s
5 h	e	n		o		m		t
i				l		e		e
6 c	h	i	c	k	e	n		r
k								

Across

- 5. a female chicken
- 6. a domestic and farm animal

Down


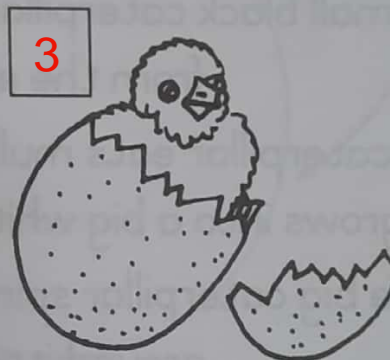

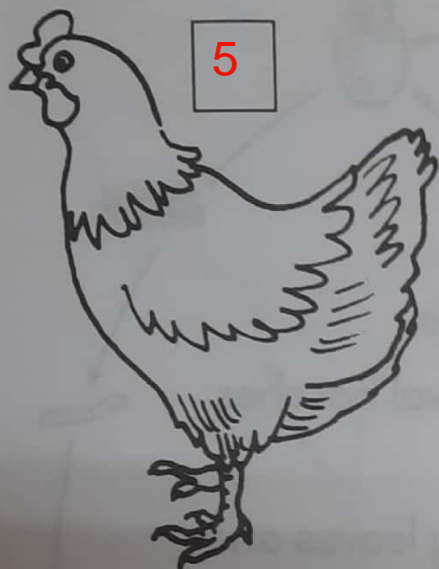
- 1. the white part of an egg
- 2. a male chicken
- 3. a young chicken
- 4. the yellow part of an egg

## Unit 8 Life cycles

### The life cycle of a chicken

All about Chickens.

Put the pictures of the life cycle of the chicken in the correct order

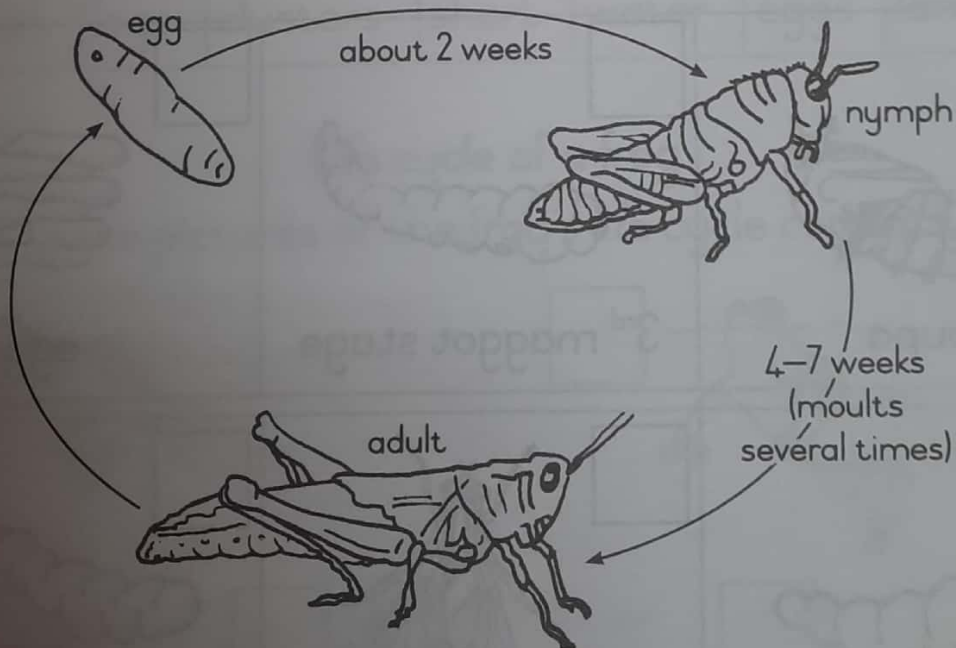
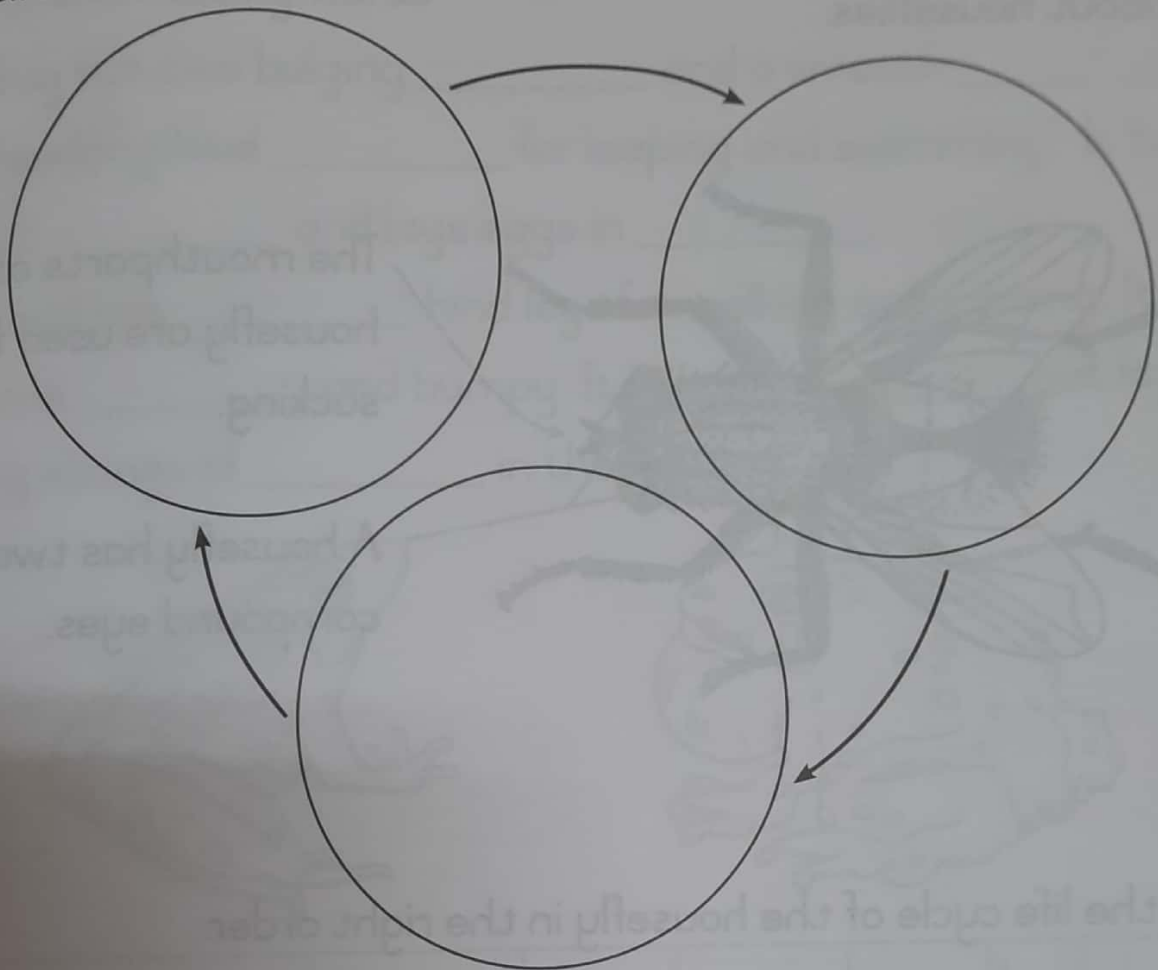


Did you know?

Chickens have nail-like toes for scratching in soil for worms, insects and seeds.

# ★ Unit 8 Life cycles

Draw and colour in the life cycle of the grasshopper inside the circles below.



**Did you know?**


A grasshopper moults five times before it becomes an adult.



## ★ Unit 8 Life cycles

### Insects with a complete metamorphosis







All about houseflies.



The mouthparts of a housefly are used for sucking.

A housefly has two compound eyes.

Put the life cycle of the housefly in the right order.

<input type="checkbox"/>  pupa	<input type="checkbox"/>  3 <sup>rd</sup> maggot stage	<input type="checkbox"/>  egg
<input type="checkbox"/>  1 <sup>st</sup> maggot stage	<input type="checkbox"/>  adult fly	<input type="checkbox"/>  2 <sup>nd</sup> maggot stage



# Unit 8 Life cycles

## Frogs and toads

Fill in the missing words

A frog has two bulging \_\_\_\_\_ and a smooth \_\_\_\_\_.

It has long hind \_\_\_\_\_ for leaping and swimming. It lives near \_\_\_\_\_ and lays eggs in \_\_\_\_\_.

A toad has \_\_\_\_\_ hind legs for walking and running. Its skin is \_\_\_\_\_ and bumpy. It lives on \_\_\_\_\_ but lays long strings of \_\_\_\_\_ in the water.



dry	skin	legs	clusters	short	water	eggs	land	eyes
-----	------	------	----------	-------	-------	------	------	------

### Life cycle of a frog

Number these pictures of the frog's life cycle correctly.

